

PICK & MIX HOMEWORK

Year 4 Homework Menu: Summer Term 1, 2024 – Settlements

Every day:

- Read daily (10 minutes)
- Practice your times tables.
- 10 minutes spelling practice- remember to use your syllables

Pick & Mix

Choose 1 item per week to complete in your homework book. Completed tasks can be photographed and uploaded via Google Classroom/ClassDojo so that your class teacher can see your amazing work or use your homework book.

Literacy

The Iron Woman is visiting Valence Primary School. Draw and annotate a detailed description of what she looks like, include details of her face and body so other year groups would know her when they see her. Write down a few questions of what you would like to ask her.

Art

Design and make your own version of the Iron Woman.

French

[French KS2: Shopping for food - BBC Teach](#)

Write your own pizza recipe in French after watching the video clip.

Maths

See Activity Sheets below or

Complete speed Test X or MTC on www.timestable.co.uk. You may also visit the following websites – www.trockstars.com and www.bbc.co.uk/teach

RE

Write about what makes you special or choose an influential person from your community or religion and write about them.

Computing

Create a PowerPoint story on an environment issue. Use different images, photos and edit them for effect.

Your PowerPoint could be animals living in the rainforest before it was cut down or children getting bad coughs due to pollution near their schools or a story of your choice.

Creative

Create a song or rap on an environmental theme and perform for the class.

Geography

Create a poster showing lots of facts and pictures of human impact on the environment. Consider: deforestation, climate change and pollution.

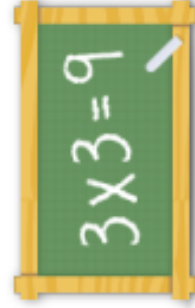
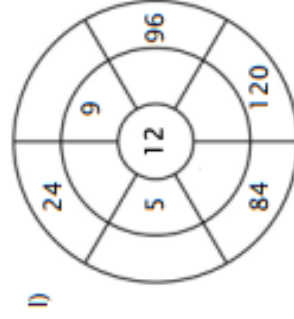
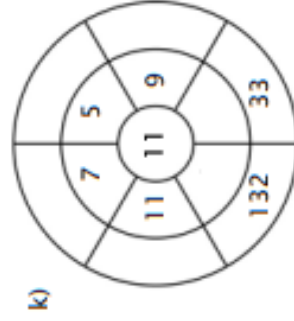
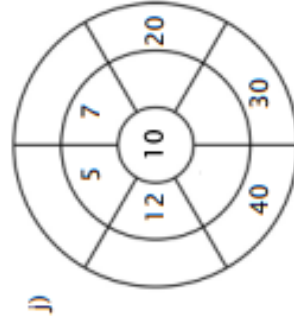
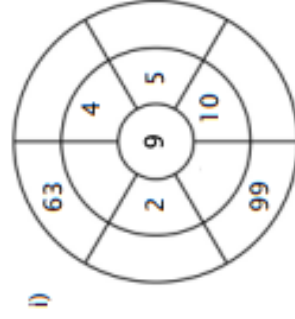
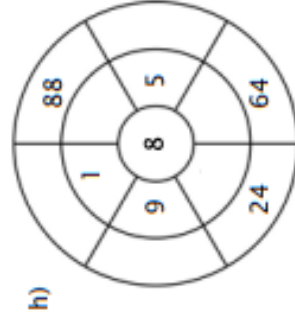
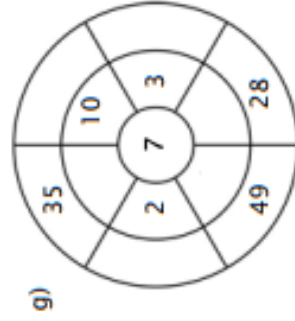
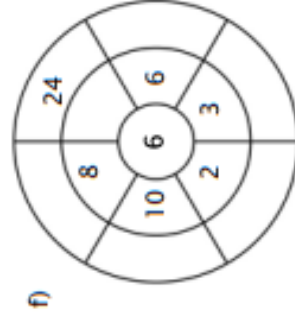
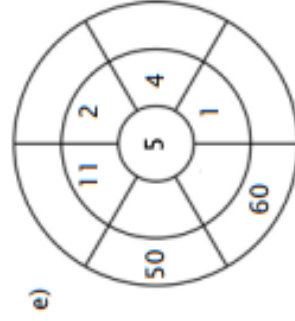
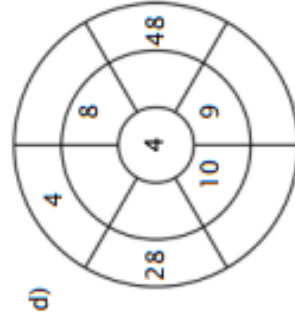
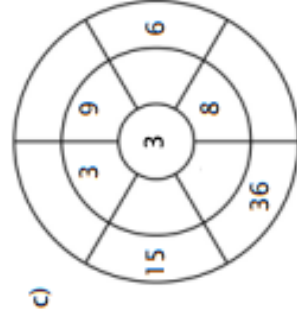
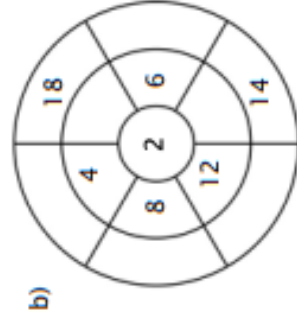
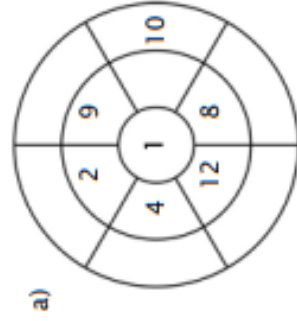
Science

Create a mini habitat using materials available to you around your home. Take pictures and upload to Class Dojo.

Times tables

Name: _____

Complete the circle by multiplying the number in the center by the middle ring to get the outer numbers.



For more worksheets, games and exercises:
www.timestables.co.uk

Times tables

Name: _____

$5 \times 12 =$ _____	$3 \times 1 =$ _____	$12 \times 3 =$ _____	$9 \times 2 =$ _____
$9 \times 8 =$ _____	$6 \times 1 =$ _____	$3 \times 6 =$ _____	$9 \times 5 =$ _____
$1 \times 6 =$ _____	$6 \times 8 =$ _____	$1 \times 12 =$ _____	$7 \times 4 =$ _____
$3 \times 9 =$ _____	$9 \times 12 =$ _____	$6 \times 3 =$ _____	$8 \times 10 =$ _____
$4 \times 10 =$ _____	$10 \times 9 =$ _____	$12 \times 6 =$ _____	$10 \times 10 =$ _____
$5 \times 9 =$ _____	$8 \times 9 =$ _____	$12 \times 5 =$ _____	$10 \times 11 =$ _____

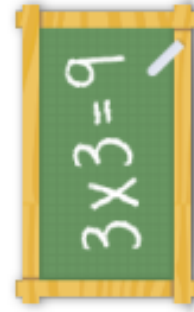
$10 \times 6 =$ _____	$8 \times 6 =$ _____	$10 \times 12 =$ _____	$1 \times 7 =$ _____
$1 \times 8 =$ _____	$5 \times 7 =$ _____	$9 \times 3 =$ _____	$8 \times 12 =$ _____
$3 \times 10 =$ _____	$10 \times 2 =$ _____	$9 \times 10 =$ _____	$2 \times 4 =$ _____
$5 \times 6 =$ _____	$10 \times 8 =$ _____	$8 \times 8 =$ _____	$11 \times 3 =$ _____
$7 \times 9 =$ _____	$2 \times 9 =$ _____	$8 \times 7 =$ _____	$12 \times 8 =$ _____
$8 \times 4 =$ _____	$8 \times 5 =$ _____	$1 \times 1 =$ _____	$5 \times 2 =$ _____

$5 \times 11 =$ _____	$7 \times 6 =$ _____	$12 \times 12 =$ _____	$7 \times 3 =$ _____
$12 \times 9 =$ _____	$11 \times 10 =$ _____	$11 \times 5 =$ _____	$12 \times 10 =$ _____
$6 \times 6 =$ _____	$11 \times 2 =$ _____	$8 \times 11 =$ _____	$11 \times 4 =$ _____
$5 \times 5 =$ _____	$4 \times 2 =$ _____	$4 \times 3 =$ _____	$7 \times 8 =$ _____
$10 \times 5 =$ _____	$9 \times 9 =$ _____	$3 \times 8 =$ _____	$4 \times 11 =$ _____
$1 \times 10 =$ _____	$10 \times 4 =$ _____	$12 \times 11 =$ _____	$2 \times 7 =$ _____

$11 \times 8 =$ _____	$6 \times 12 =$ _____	$11 \times 9 =$ _____	$4 \times 1 =$ _____
$4 \times 5 =$ _____	$7 \times 5 =$ _____	$4 \times 4 =$ _____	$1 \times 3 =$ _____
$1 \times 4 =$ _____	$5 \times 3 =$ _____	$2 \times 8 =$ _____	$9 \times 7 =$ _____
$8 \times 1 =$ _____	$12 \times 4 =$ _____	$3 \times 2 =$ _____	$2 \times 11 =$ _____
$5 \times 10 =$ _____	$9 \times 1 =$ _____	$1 \times 9 =$ _____	$7 \times 11 =$ _____
$2 \times 6 =$ _____	$2 \times 3 =$ _____	$12 \times 7 =$ _____	$2 \times 10 =$ _____

$4 \times 12 =$ _____	$11 \times 6 =$ _____	$4 \times 8 =$ _____	$3 \times 11 =$ _____
$2 \times 5 =$ _____	$4 \times 9 =$ _____	$4 \times 6 =$ _____	$11 \times 1 =$ _____
$2 \times 12 =$ _____	$2 \times 2 =$ _____	$3 \times 5 =$ _____	$3 \times 3 =$ _____
$8 \times 2 =$ _____	$12 \times 2 =$ _____	$10 \times 3 =$ _____	$10 \times 1 =$ _____
$5 \times 4 =$ _____	$3 \times 7 =$ _____	$7 \times 12 =$ _____	$1 \times 5 =$ _____
$6 \times 4 =$ _____	$12 \times 1 =$ _____	$3 \times 12 =$ _____	$6 \times 9 =$ _____

$1 \times 11 =$ _____	$3 \times 4 =$ _____	$11 \times 11 =$ _____	$6 \times 5 =$ _____
$6 \times 2 =$ _____	$6 \times 11 =$ _____	$11 \times 12 =$ _____	$7 \times 2 =$ _____
$10 \times 7 =$ _____	$5 \times 8 =$ _____	$9 \times 4 =$ _____	$5 \times 1 =$ _____
$11 \times 7 =$ _____	$7 \times 1 =$ _____	$7 \times 10 =$ _____	$9 \times 11 =$ _____
$7 \times 7 =$ _____	$2 \times 1 =$ _____	$6 \times 10 =$ _____	$8 \times 3 =$ _____
$6 \times 7 =$ _____	$4 \times 7 =$ _____	$9 \times 6 =$ _____	$1 \times 2 =$ _____



For more worksheets, games and exercises:
www.timestables.co.uk